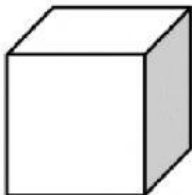
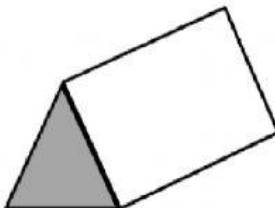
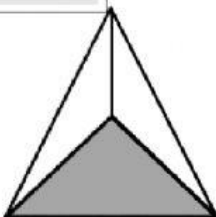

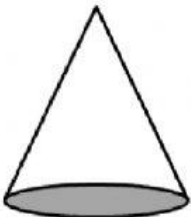
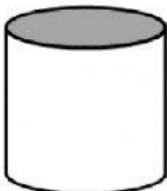

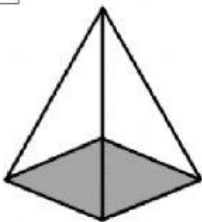




WORKSHEET MEETING 24
FACE, EDGE, AND VERTICE

NAME : _____ **CLASS :** _____

Fill in the name, and number of faces, edges and vertices for each shape.

CUBE Faces: Edges: Vertices: 	PRISM Faces: Edges: Vertices: 
TRIANGULAR PYRAMID Faces: Edges: Vertices: 	CUBOID Faces: Edges: Vertices: 
CONE Faces: Edges: Vertices: 	CYLINDER Faces: Edges: Vertices: 
SPHERE Faces: Edges: Vertices: 	SQUARE PYRAMID Faces: Edges: Vertices: 



cylinder	square pyramid	triangular pyramid	cuboid
cube	sphere	triangular prism	cone

