

Complete Patterns

Name			
Date		Class	2 nd Grade



I. Complete the missing numbers in these patterns.

a) 75, 70, 65, , 50, 45.

The pattern is counting by: _____

b) 24, 34, 44, 54, 64, , 84.

The pattern is counting by: _____

c) 45, 47, 49, , , 55.

The pattern is counting by: _____

d) 37, 40, 43, , 49, .

The pattern is counting by: _____

e) 894, 794, 694, 594, , 394, 294.

The pattern is counting backwards by: _____

f) 69, 64, 59, , 49, 44, 39, 34.

The pattern is counting backwards by: _____

g) 99, 95, 91, , 83, 79, , 71.

The pattern is counting backwards by: _____

2. What kind of pattern is: 89, 84, 79, 74, 69, 64.

Increasing Pattern


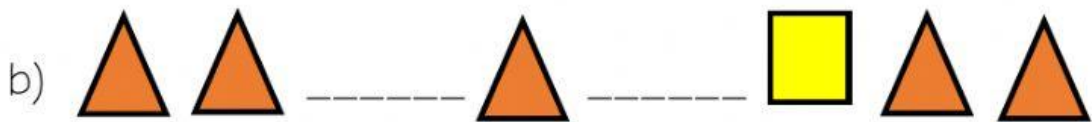

Decreasing Pattern

3. What kind of pattern is: 104, 102, 100, 98, 96, 94.

Increasing Pattern

Decreasing Pattern

4. Drag the shapes to complete the missing elements on each pattern.



Shapes to drag:

