

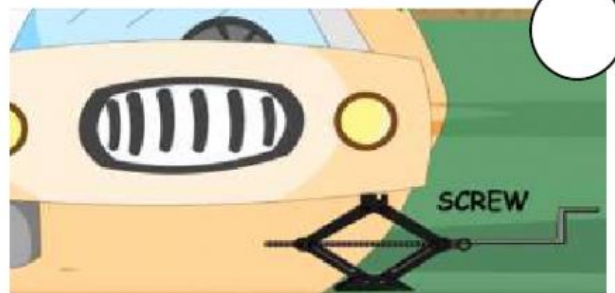
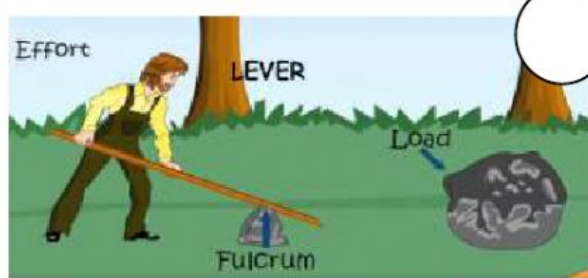

TECHNOLOGY - ACTIVITY 14

- Let's watch the video again.

Which Simple machine do these sentences refer to?

- Write the number next to the picture.

- 1) Ramp that helps you move objects up or down heights.
- 2) It helps you lift loads with less effort. It is a long rigid body and is has a fulcrum along its length.
- 3) It's one of the most commonly used simple machine in the world. It can be used to drill holes, hold things together or lift object.
- 4) It helps you lift very heavy objects. It's made of a wheel and a rope.
- 5) It helps us move objects from one place to another with less force or effort.



Now let's think .

- Look at these pictures and identify the kind of simple machine used here.



PULLEY

LEVER

INCLINED PLANE

SCREW

WHEEL