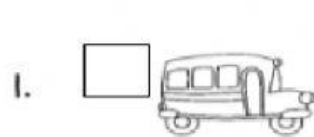
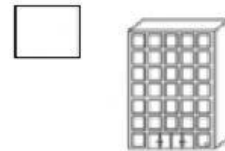


Which Has A Greater Mass?

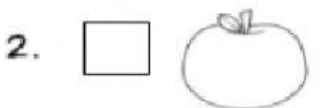
Put an X in the box for the object with the greater mass.



bus



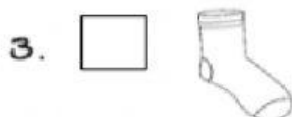
building




apple




ant



sock



dog



elephant



mouse

Put an X in the box that has the correct amount for each measurement given.

Measurement Mania:
CUPS, PINTS and QUARTS



1 cup



2 cups = 1 pint



4 cups = 1 quart

1 quart



2 pints



1 pint



2 quarts

