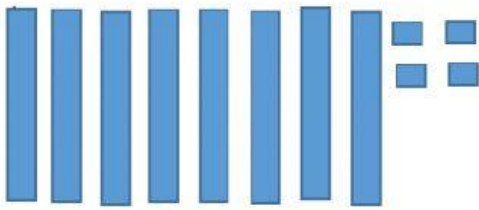



# Escribe los números representados



$$\boxed{80} + \boxed{4} = \boxed{84}$$

$$\boxed{8D} \text{ Y } \boxed{4U}$$

En palabras: Ochenta y cuatro



$$\boxed{\phantom{00}} + \boxed{\phantom{00}} = \boxed{\phantom{00}}$$

$$\boxed{\phantom{00}} \text{ Y } \boxed{\phantom{00}}$$


En palabras: \_\_\_\_\_



$$\boxed{\phantom{00}} + \boxed{\phantom{00}} = \boxed{\phantom{00}}$$

$$\boxed{\phantom{00}} \text{ Y } \boxed{\phantom{00}}$$


En palabras: \_\_\_\_\_



$$\boxed{\phantom{00}} + \boxed{\phantom{00}} = \boxed{\phantom{00}}$$

$$\boxed{\phantom{00}} \text{ Y } \boxed{\phantom{00}}$$


En palabras: \_\_\_\_\_



$$\boxed{\phantom{00}} + \boxed{\phantom{00}} = \boxed{\phantom{00}}$$

$$\boxed{\phantom{00}} \text{ Y } \boxed{\phantom{00}}$$

En palabras: \_\_\_\_\_



$$\boxed{\phantom{00}} + \boxed{\phantom{00}} = \boxed{\phantom{00}}$$

$$\boxed{\phantom{00}} \text{ Y } \boxed{\phantom{00}}$$

En palabras: \_\_\_\_\_