





Name: _____

Type the name of each shape in the box next to the shape.

1. 	
2. 	
3. 	
4. 	

Type the missing number comes before or after.

5. _____, 2

6. _____, 15

7. _____, 10

8. _____, 19

9. 7, _____

10. 16, _____

11. 13, _____

14. 10, _____

Type the answer for each riddle.

15. I am ten and six more. Who am I? _____

16. I come after nine. Who am I? _____

17. I am made up of the digits two and zero. Who am I? _____

18. I am three more than 5. Who am I? _____

19. I am one less than fifteen. Who am I? _____

20. I am two less than seven. Who am I? _____

