

2D SHAPES

Write down the correct answer about 2D shapes' characteristic!

1



This 2D shape is a square.

How many corners it has? _____

How many sides it has? _____

2




This 2D shape is a circle.

How many corners it has? _____

How many sides it has? _____

3



This 2D shape is a rectangle.

How many corners it has?

How many sides it has?

2D SHAPES

4




This 2D shape is a triangle.

How many corners it has? _____

How many sides it has? _____

5




This 2D shape is a pentagon.

How many corners it has? _____

How many sides it has? _____

6



This 2D shape is a hexagon.

How many corners it has? _____

How many sides it has? _____