





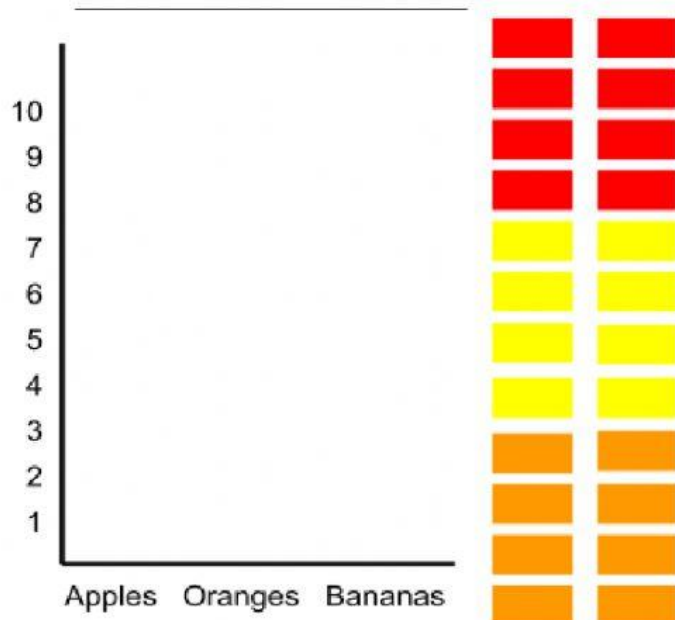


Make a bar graph using the data.

Favorite Fruits	
Apples 	
Oranges 	
Banana 	

\*Don't forget to label the graph.



Answer these questions about the graph.

1. Do more students like apples or bananas? \_\_\_\_\_
2. Which fruit has 7 votes? \_\_\_\_\_
3. How many more votes are there for bananas than apples? \_\_\_\_\_
4. How many more votes are there for apples than oranges? \_\_\_\_\_
5. How many more votes are there for bananas than oranges? \_\_\_\_\_