



CROWN PRIVATE SCHOOL

مدرسة كراون الخاصة

Al - Hamidiya 1, Ajman, UAE

Affiliated to: Cambridge International Examinations
(CIE)

Cambridge Assessment International Education

Cambridge Primary

CANDIDATE NAME					
CLASS		SECTION		CANDIDATE ID	

MID TERM EXAMINATION	ICT
SEPTEMBER 2020	
Grade 1	20 Marks
PAPER 1	40 Minutes

Instructions:

- Write your Name, Class & Section and ID in the spaces provided.
- Read the questions carefully and attempt to answer all the questions.

Blooms Taxonomy	T1	T2	T3	T4	T5	T6	Total
Marks Obtained							
Marks Total	10	2	3	5	NA	NA	20

Questions	Marks Scored	Questions	Marks Scored
1		11	
2		12	
3		13	
4		14	
5		15	
6		16	
7		17	
8		18	
9		19	
10		20	

AO 1	
AO 2	
Total	

Teacher's Signature: _____

Date: _____

This paper consists of 3 printed pages.



A. Look at the pictures carefully. Identify if it is a **machine** or **not machine**.

Q1.



- a. Machine
- b. Not machine

T1
[1]


Q2.



- a. Machine
- b. Not machine

T1
[1]

Q3.

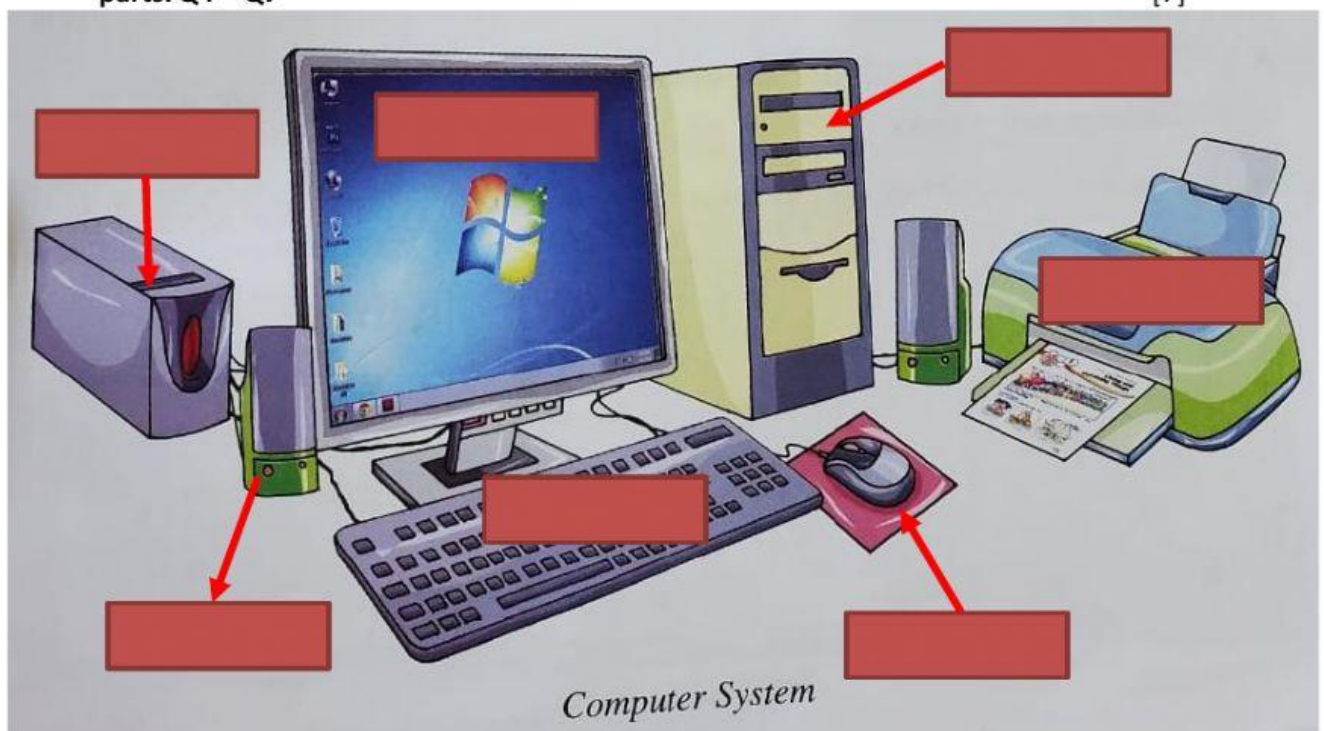


- a. Machine
- b. Not machine

T1
[1]

B. Identify the parts of a computer. Drag and drop the correct name of each parts. Q4 – Q7

T1
[7]



monitor

keyboard

mouse

CPU

printer

UPS

speakers



C. Complete the following statement.

Q11. Machines are _____ things.

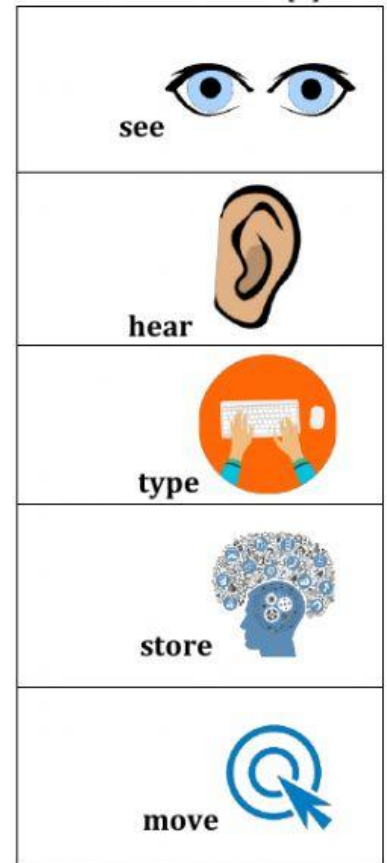
T2
[1]

Q12. A computer runs on _____.

T2
[1]

D. Draw line to match the following. Q13 – Q17

T4
[5]



**E. Read the sentences given below carefully. Type missing words to complete the sentence.
Choose the correct missing word.**

CPU keys monitor buttons mouse

Q18. A computer _____ looks like television.

T3
[1]

Q19. The buttons on the keyboard are called. _____.

T3
[1]

Q20. The _____ stores information in the computer

T3
[1]

*******Thank you!*******