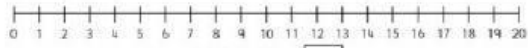
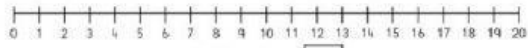


## ☆☆ Number Line Subtraction ☆☆

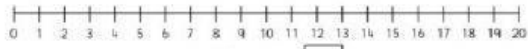
Finish the number sentences. Use the number lines to help.



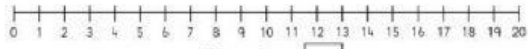
$$19 - 7 = \square$$




$$11 - 6 = \square$$



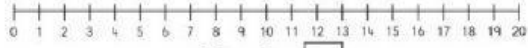
$$20 - 4 = \square$$



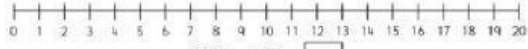
$$15 - 8 = \square$$



$$14 - 7 = \square$$



$$18 - 2 = \square$$



$$20 - 13 = \square$$