



NOME:

PROFESSORA:




DATA:

COMPLETE A QUANTIDADE DE BOLINHAS PARA QUE TODAS AS JOANINHAS TENHAM DEZ PINTINHAS. EM SEGUIDA REGISTRE A SOMA, ESCRIVENDO OS NUMERAIS CORRETOS.



$$\boxed{5} + \boxed{\phantom{00}} = \boxed{10}$$

$$\boxed{7} + \boxed{\phantom{00}} = \boxed{\phantom{00}}$$



$$\boxed{8} + \boxed{\phantom{00}} = \boxed{\phantom{00}}$$

$$\boxed{4} + \boxed{\phantom{00}} = \boxed{\phantom{00}}$$

OBSERVE BEM AS JOANINHAS ABAIXO E FORME OS PARES IGUAIS.

