

**It is easier to find things when you know what you are looking for.
See if you can find all 13 items on the grid below.**

What is at D7?

What is at 1A?

What is at E5?

What is at 6C?

What is at G1?

Start at A1. Move North 5 boxes and East 3 boxes. What did you find?

Start at E4. Move West 2 boxes, South 3 boxes and East 1 box. What did you find?

Start at 7A. Move North 6 boxes and West 2 boxes. What did you find?




















Start at C2. Move Right 1 box, North 1 box and Left 2 boxes. What did you find?

Starting at the water bottle in E2. How can you get to the torch?

Starting at the chair in A2. How can you get to the broccoli?

Starting at the pumpkin in F6. How can you get to the crab?

Starting at the frog in A7. How can you get to the guitar?

G							
F							
E							
D							
C							
B							
A							
	1	2	3	4	5	6	7

