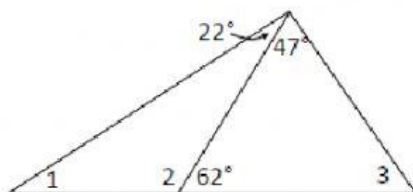


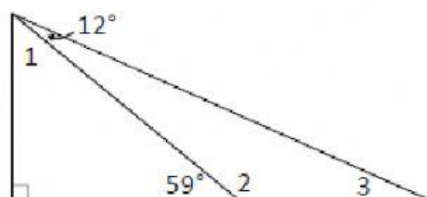
1

Find the measure of each numbered angle:



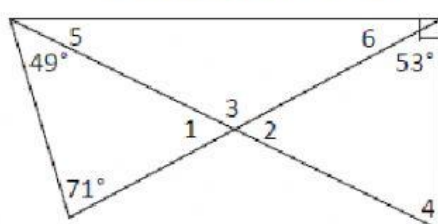
5

Find the measure of each numbered angle:



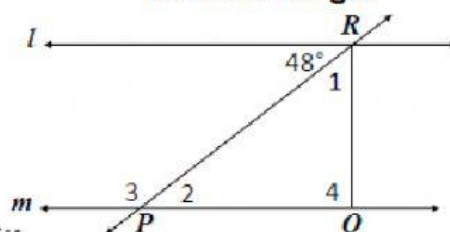
2

Find the measure of each numbered angle:



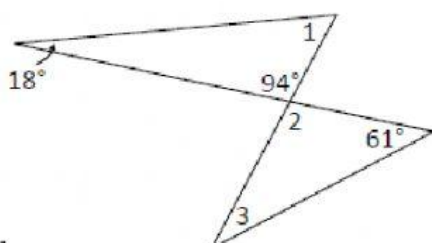
7

If $l \parallel m$ and $\overline{RQ} \perp \overline{PQ}$, find the measure of each numbered angle.



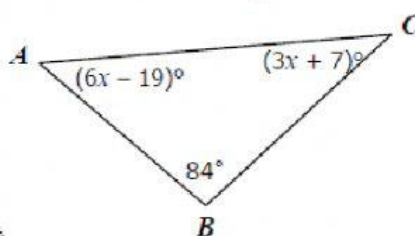
3

Find the measure of each numbered angle:



9

Find the value of x in the triangle below:



4

Find the measure of each numbered angle:

