

WORKSHEET 1: ADDITION



1. Add.

$$\begin{array}{r} 1) \quad 472 \\ + \quad 124 \\ \hline \end{array} \quad \begin{array}{r} 2) \quad 703 \\ + \quad 241 \\ \hline \end{array} \quad \begin{array}{r} 3) \quad 532 \\ + \quad 106 \\ \hline \end{array} \quad \begin{array}{r} 4) \quad 246 \\ + \quad 123 \\ \hline \end{array}$$

$$\begin{array}{r} 5) \quad 630 \\ + \quad 142 \\ \hline \end{array} \quad \begin{array}{r} 6) \quad 346 \\ + \quad 210 \\ \hline \end{array} \quad \begin{array}{r} 7) \quad 305 \\ + \quad 152 \\ \hline \end{array} \quad \begin{array}{r} 8) \quad 522 \\ + \quad 136 \\ \hline \end{array}$$

$$\begin{array}{r} 9) \quad 813 \\ + \quad 52 \\ \hline \end{array} \quad \begin{array}{r} 10) \quad 446 \\ + \quad 350 \\ \hline \end{array} \quad \begin{array}{r} 11) \quad 620 \\ + \quad 142 \\ \hline \end{array} \quad \begin{array}{r} 12) \quad 735 \\ + \quad 44 \\ \hline \end{array}$$

2. Kit Collected 413 stamps. Peggy Collected 86 more stamps than Kit. How Many stamps did Peggy Collect?

$$\begin{array}{r} \square \square \square \\ + \square \square \square \\ \hline \square \square \square \end{array}$$

Peggy collected _____ Stamps.

3. A farmer has 345 goats and 234 sheep. How Many animals does he have on his farm altogether?

$$\begin{array}{r} \square \square \square \\ + \square \square \square \\ \hline \square \square \square \end{array}$$

He has _____ animals on his farm altogether.

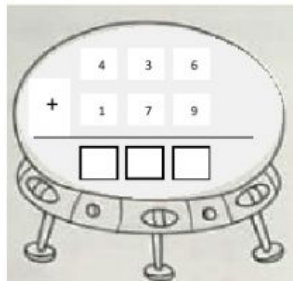
4. A tailor had 406 buttons. She bought another 200 buttons. How Many buttons does she have now?

$$\begin{array}{r} \square \square \square \\ + \square \square \square \\ \hline \square \square \square \end{array}$$

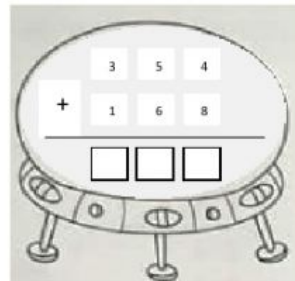
He has _____ animals on his farm altogether.

5. Solve the Riddle

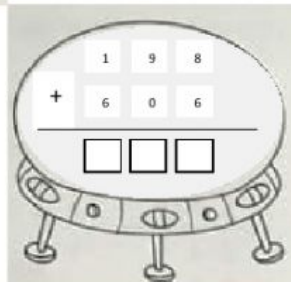
Which Planet can sing in tune?



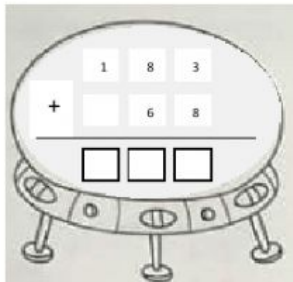
P



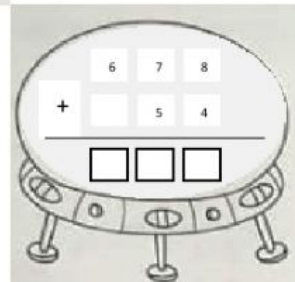
E



N



U



T

