































# Pictogram 2

Complete the table and use the pictogram to answer the questions.

| Month     | Sunny Days  | Frequency |
|-----------|---|-----------|
| April     |      |           |
| May       |        |           |
| June      |        |           |
| July      |         |           |
| August    |        |           |
| September |       |           |



= 3 sunny days

1. How many days were sunny in May? \_\_\_\_\_
2. How many days were sunny in July? \_\_\_\_\_
3. Which month had the MOST sunny days? \_\_\_\_\_
4. Which month had the LEAST sunny days? \_\_\_\_\_
5. Which two months had the same number of sunny days? \_\_\_\_\_

6. How many sunny days were there in July, August and September, altogether?

\_\_\_\_\_

7. How many MORE sunny days does August have than April? \_\_\_\_\_

8. What is the difference between the number of sunny days in April and June?

\_\_\_\_\_

9. How many sunny days were there altogether? \_\_\_\_\_