

# KENDRIYA VIDYALAYA SIKH LINES MEERUT CANTT

## CHAPTER- LONG AND SHORT

CLASS -4

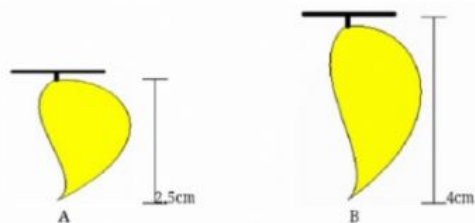
PREPARED BY :MRS ARCHNA MR ARVIND GAUR

NAME-----

CLASS-----

ROLL NO. -

QUE1- Which mango is shortest?



-

Ans-

QUE 2- Which tree is shortest?



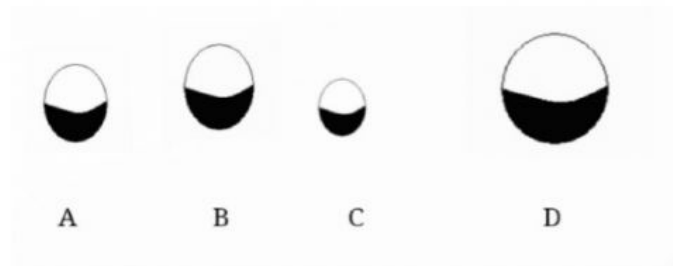
ANS-

QUE 3- Which figure is longer?



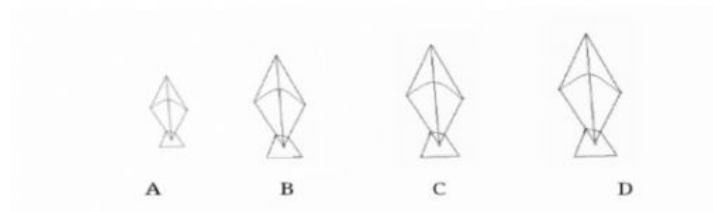
ANS-

**QUE 4-Which moon is longest in the figure?**



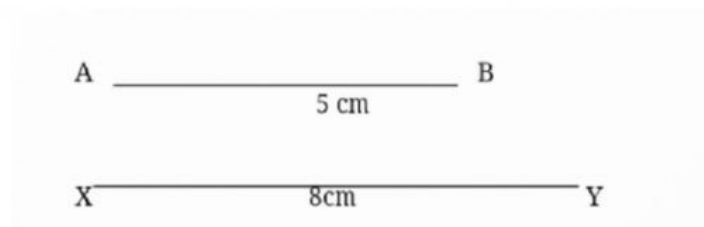
ANS-

**QUE- 5 Which kite is shortest?**



ANS-

**QUE- 6 Which line is shorter AB or XY?**



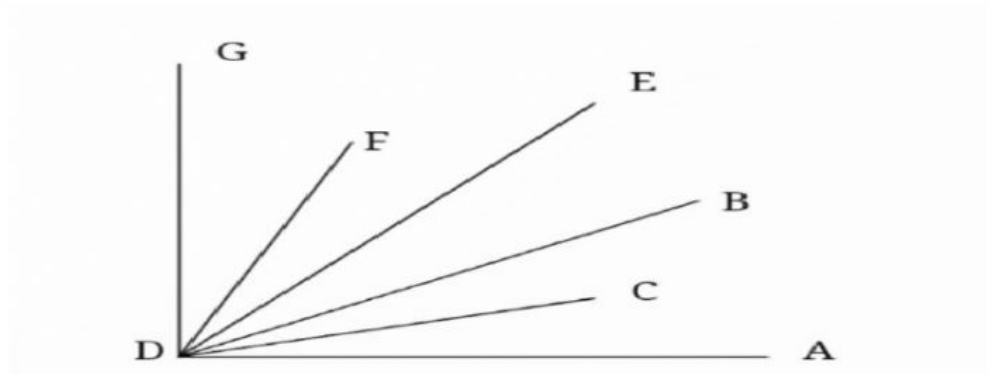
ANS-

**QUE -7 Which bucket is longest of all?**



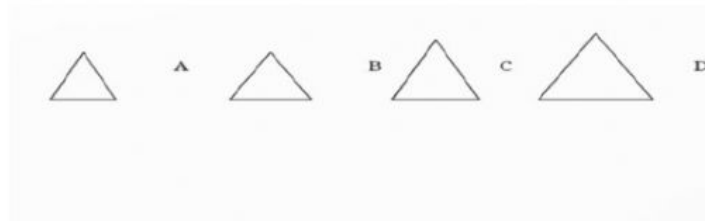
ANS-

**QUE 8- Which dot is nearest to D?**



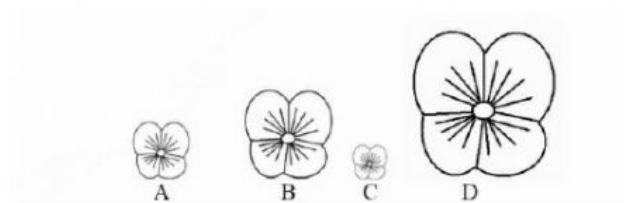
**ANS-**

**QUE 9- Which triangle is longer in all of them?**



**ANS-**

**QUE 10 – Which flower is longer?**



**ANS-**