




Mari Berlatih

Tentukan bilangan yang tepat untuk soal berikut!


1.



$$\boxed{\dots} + \boxed{\dots} + \boxed{\dots} + \boxed{\dots} + \boxed{\dots} = \boxed{\dots}$$

$$\dots \times \dots = \dots$$


2.



$$\boxed{\dots} + \boxed{\dots} + \boxed{\dots} + \boxed{\dots} = \boxed{\dots}$$

$$\dots \times \dots = \dots$$

3.



$$\boxed{\dots} + \boxed{\dots} = \boxed{\dots}$$

$$\dots \times \dots = \dots$$

4.



$$\boxed{\dots} + \boxed{\dots} + \boxed{\dots} = \boxed{\dots}$$

$$\dots \times \dots = \dots$$