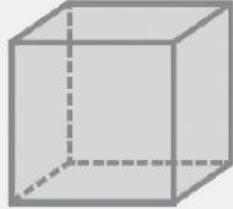


3D Shapes

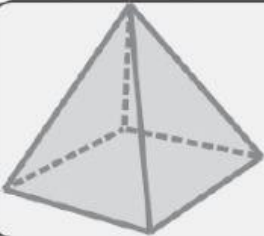
Name: _____ Class: _____

Name each 3D shape and write down the number of faces, vertices and edges.



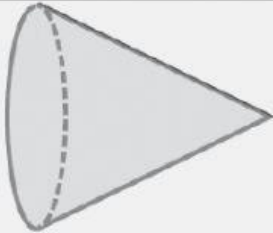
Name: _____ Edges: _____

Faces: _____ Vertices: _____



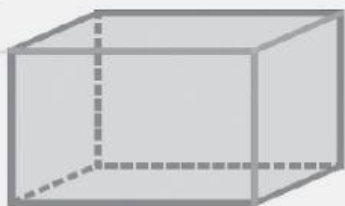
Name: _____ Edges: _____

Faces: _____ Vertices: _____



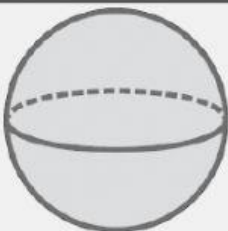
Name: _____ Edges: _____

Faces: _____ Vertices: _____



Name: _____ Edges: _____

Faces: _____ Vertices: _____



Name: _____ Edges: _____

Faces: _____ Vertices: _____