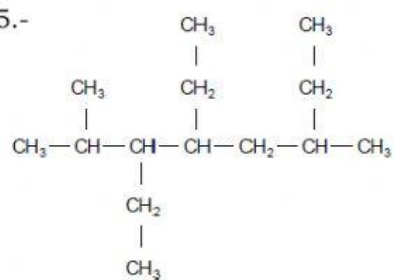
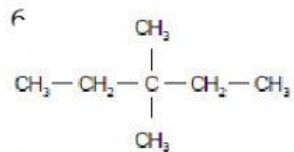


Nombra los siguientes alcanos ramificados

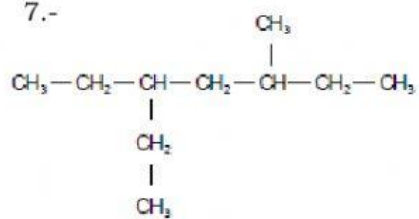
5.-



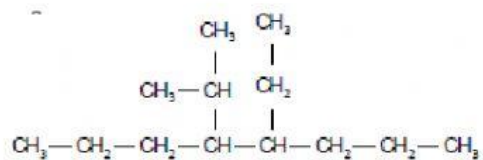
6.



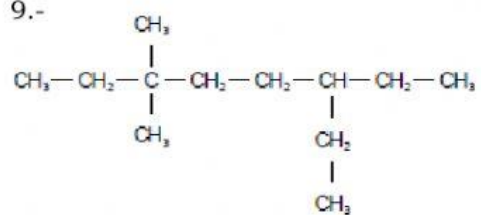
7.-



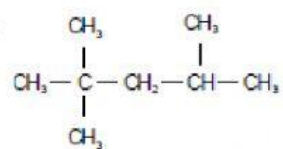
8.

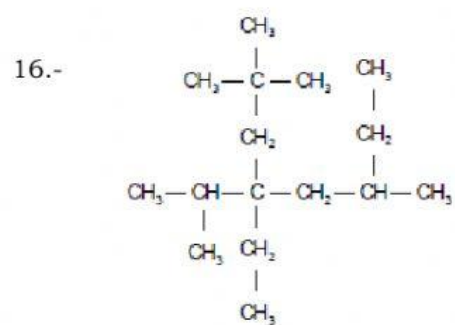
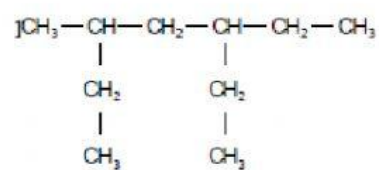
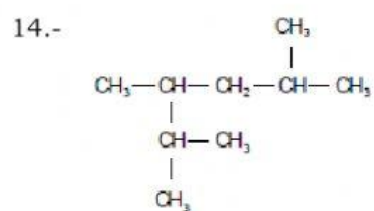
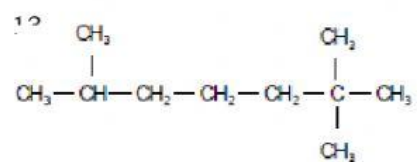
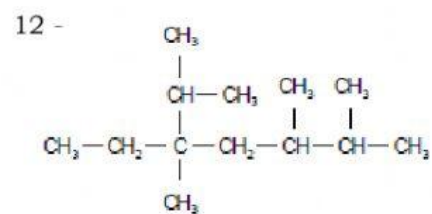
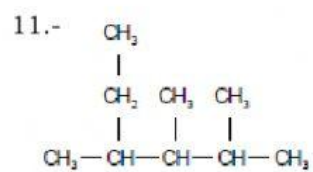


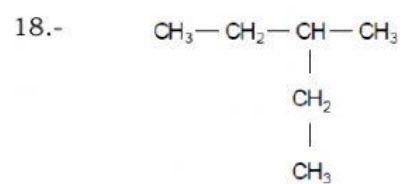
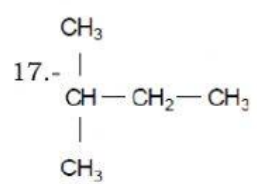
9.-



10.-







Escribe las estructuras de los siguientes alcanos ramificados

19.- 2-metilpropano

20.- 2, 2, 3-trimetilbutano

21.- 3-etil-2,3-dimetilhexano

22.- 5-ter-butil-5-etil-3-isopropil-2,6-dimetiloctano

23.- 4-sec-butil-2,2,4,5,6-pentametilheptano

24.- 6-ter-butil-3,5,5-trietil-2,4-dimetilnonano

25.- 7-butil-6-isobutil-5-isopropil-3,8-dimetil-7-neopentil-6-propilundecano