





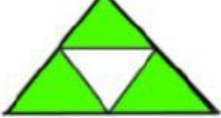
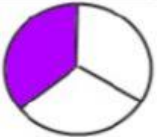



WORKSHEET FOR CLASS 4 KV NKJ KATNI

Pick the right fraction represented by the shaded part of each shape. First one is done as an example;

1) 	$\frac{1}{2}$ $\frac{3}{6}$ <u>$\frac{5}{6}$</u> $\frac{1}{6}$ $\frac{6}{5}$
2) 	$\frac{1}{4}$ $\frac{3}{4}$ $\frac{1}{6}$ $\frac{1}{3}$ $\frac{1}{5}$
3) 	$\frac{1}{2}$ $\frac{3}{8}$ $\frac{1}{6}$ $\frac{1}{7}$ $\frac{6}{8}$
4) 	$\frac{1}{3}$ $\frac{3}{6}$ $\frac{1}{2}$ $\frac{1}{5}$ $\frac{1}{4}$
5) 	$\frac{4}{6}$ $\frac{5}{6}$ $\frac{4}{5}$ $\frac{1}{6}$ $\frac{3}{5}$
6) 	$\frac{1}{3}$ $\frac{1}{4}$ $\frac{1}{2}$ $\frac{1}{5}$ $\frac{2}{1}$
7) 	$\frac{1}{2}$ $\frac{3}{4}$ $\frac{5}{6}$ $\frac{1}{4}$ $\frac{4}{3}$
8) 	$\frac{1}{6}$ $\frac{2}{3}$ $\frac{3}{3}$ $\frac{1}{3}$ $\frac{2}{5}$
9) 	$\frac{3}{5}$ $\frac{3}{4}$ $\frac{5}{4}$ $\frac{4}{6}$ $\frac{4}{5}$