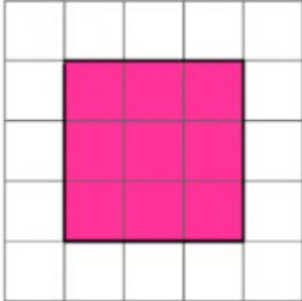


## How many Squares?

Ques.: How many squares do each shape cover? Tick the Correct Answer.

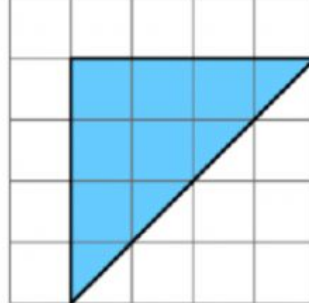
Q.1



9

8

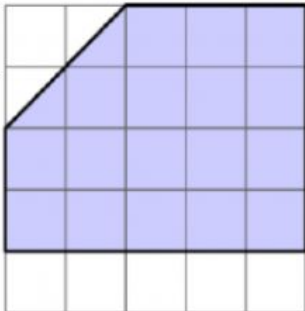
Q. 2



8

7

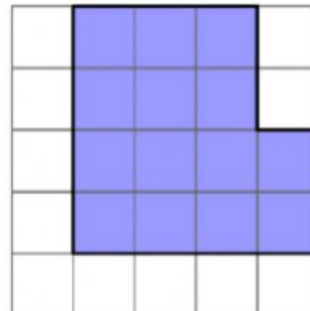
Q.3



16

18

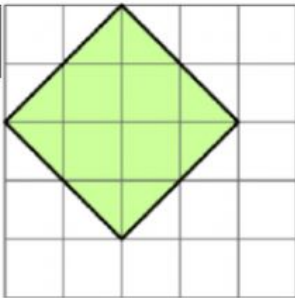
Q.4



14

16

Q. 5



12

8