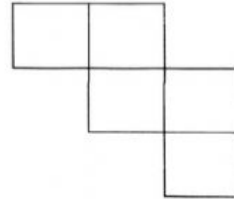
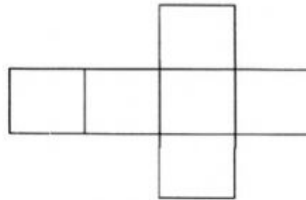
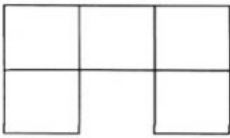


Topic : Boxes and Sketches
Worksheet -1

Date _____
Month _____

Cometency : Understanding Basic Concepts

Which of these nets will make a cube, tick them


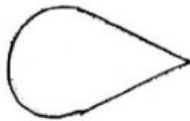


II Match each net provided in coloumn A to its corresponding object in coloumn B

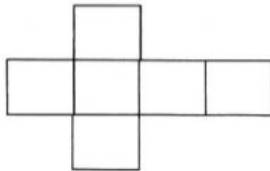
A

B

1.



2.



3.

