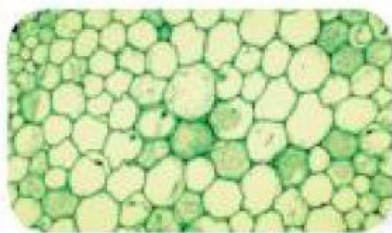


Name: _____ Class: _____

Identify the types of plant cell
(Parenchyma, Collenchyma, Sclerenchyma)

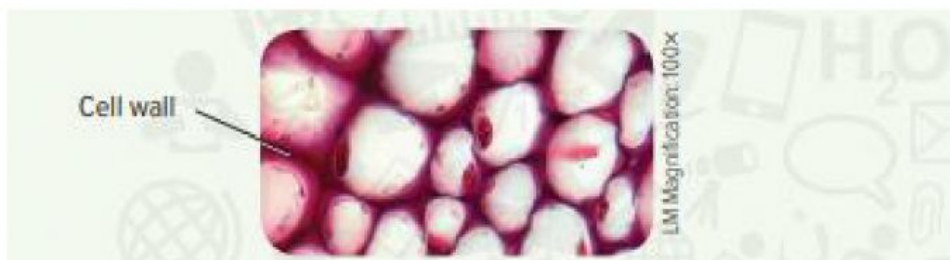


Without chloroplasts



With chloroplasts

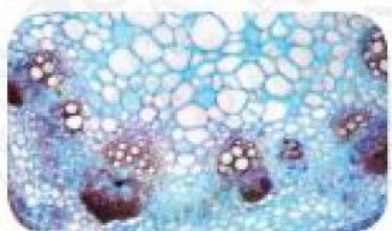
Cell with thin cell wall = _____



Cell with unevenly thickened cell wall = _____



Sclereid



Fibers

Cell with thick cell wall = _____