

Heavy vs Light

Tick the correct choice that best describes the weight of each object.

1)




☐ Heavy ☐ Light

2)




☐ Heavy ☐ Light

3)



☐ Heavy ☐ Light

4)



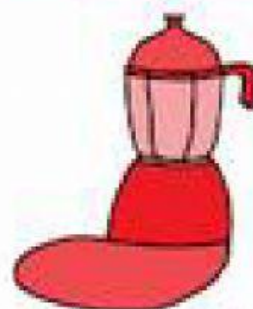
☐ Heavy ☐ Light

5)



☐ Heavy ☐ Light

6)



☐ Heavy ☐ Light