

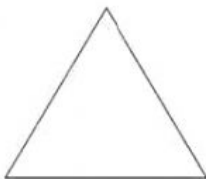
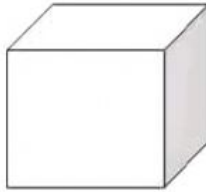

KENDRIYA VIDYALAYA DONGARGARH

Worksheet

Class- IV

Subject - Maths

1. Write the name of the given shapes -




2. Fill in the blanks-

- a. A brick has _____ number of edges.
- b. A brick has _____ number of faces.
- c. A square has _____ sides.

3. Observe the following pictures and answer the question below-



A



B

Which wall will be stronger?

Ans- _____

4. If the cost of 1 brick is Rs.2 then what is the cost of 100 bricks ?

Ans.- _____.