


**Directions: What time is it? Match the clocks with the correct time.**



**Three o'clock**




**One o'clock**




**Twelve oclock**



**Five o'clock**



**Nine o'clock**



**Seven o'clock**