


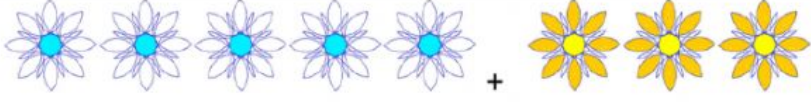



Write the addition sentence that matches each picture.

1)  +
 $4 + 3 = 7$

2)  +
 $\underline{\quad} + \underline{\quad} = \underline{\quad}$

3)  +
 $\underline{\quad} + \underline{\quad} = \underline{\quad}$

4)  +
 $\underline{\quad} + \underline{\quad} = \underline{\quad}$

5)  +
 $\underline{\quad} + \underline{\quad} = \underline{\quad}$

6)  +
 $\underline{\quad} + \underline{\quad} = \underline{\quad}$