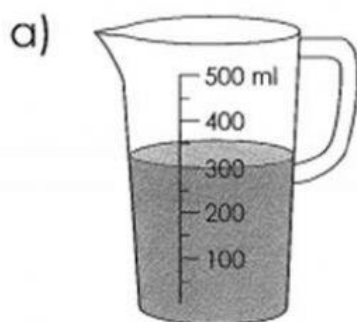


# Mathematics

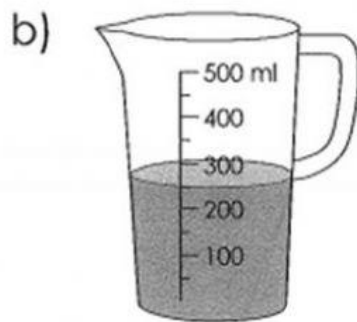
## Volume and Capacity

### Friday

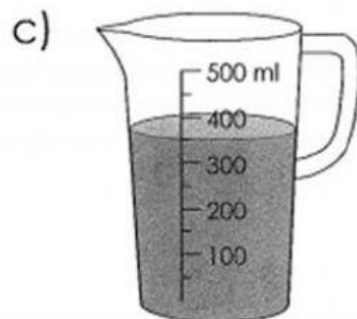
2. Write the volume of water for each container.



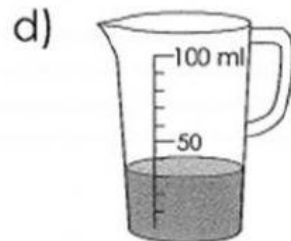
\_\_\_\_\_ ml



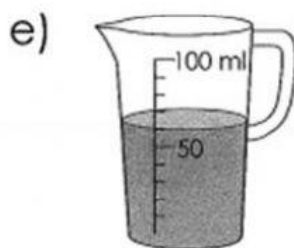
\_\_\_\_\_ ml



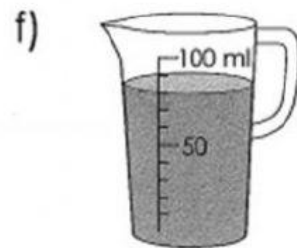
\_\_\_\_\_ ml



\_\_\_\_\_ ml




\_\_\_\_\_ ml



\_\_\_\_\_ ml

## Exercise 7    Liters and Milliliters

1. Match.



1 L

100 ml

300 ml

600 ml

800 ml

200 ml

400 ml

900 ml

500 ml

700 ml

