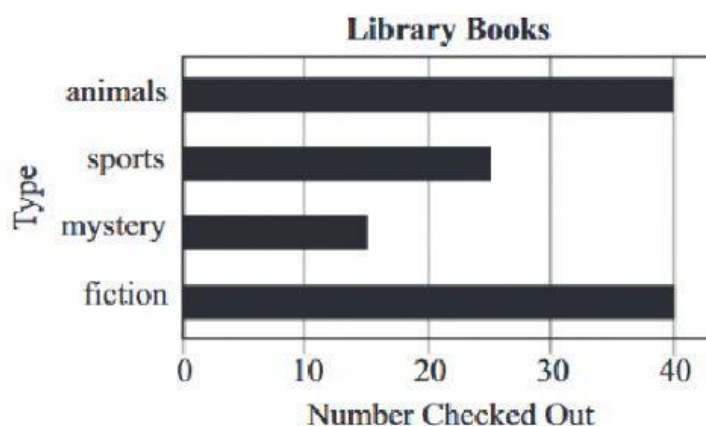


DATE: _____

- ✓ Read each question carefully and choose the best answers.
- ✓ Be sure to answer All the questions. Remember only one of the answers provided is the correct response.
- ✓ Write (type) A,B, C or D on the line to give the correct answer for each question.

17.

Use the graph below to answer the question.




How many more fiction books are checked out than sports books?

- A. 15
- B. 20
- C. 25
- D. 30

Answer:

18.

Use the picture below to answer the question.



The temperature on Thursday afternoon was 70°F , as shown on the thermometer. A storm came through and the temperature dropped 30° . What was the temperature after the storm?

- A. 30°
- B. 40°
- C. 50°
- D. 70°

Answer:

19.

Use the table below to answer the question.

Heights of Children

Child	Jack	Trevon	Anna	Gabby
Height	137 centimeters	1 meter	92 centimeters	120 centimeters

Which list orders the children from tallest to shortest?

- A. Jack, Gabby, Trevon, Anna
- B. Jack, Trevon, Anna, Gabby
- C. Trevon, Anna, Gabby, Jack
- D. Anna, Trevon, Gabby, Jack

Answer

20.

Which is the BEST number sentence for finding the distance a cheetah can run in four hours?

- A. $70 + 4 = 74$ miles
- B. $70 - 4 = 66$ miles
- C. $70 + 70 + 70 = 210$ miles
- D. $70 + 70 + 70 + 70 = 280$ miles

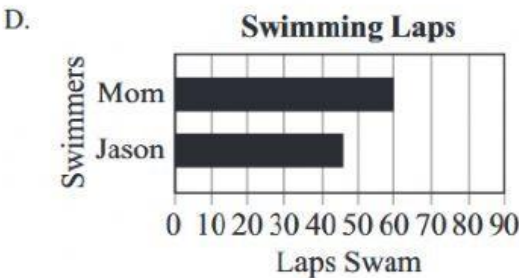
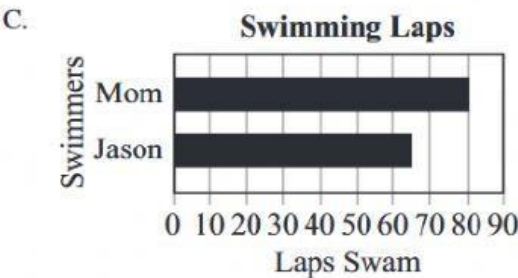
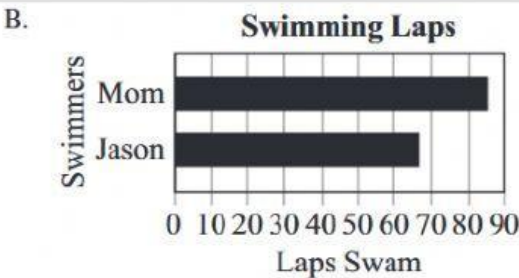
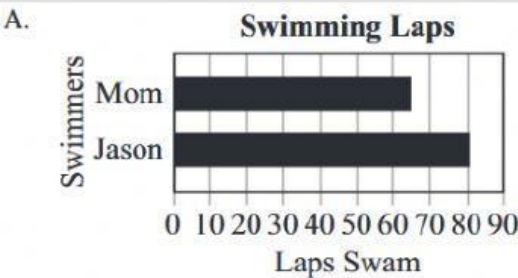
Answer:

21.

Use the table below to answer the question.

Swimming Laps		
June		
Week	Mom	Jason
One	20	10
Two	25	20
Three	15	15
Four	20	20

Which bar graph shows the total number of laps Mom and Jason each swam in June?



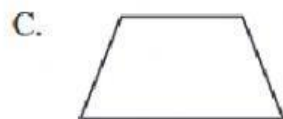
Answer:

22.

Use the picture below to answer the question.



Which shape is $\frac{1}{3}$ of the trapezoid?



Answer:  _____

23.

Use the picture below to answer the question.



Which measurement is closest to the length of a baseball bat?

- A. 1 inch
- B. 1 foot
- C. 1 yard
- D. 1 mile

Answer:

24.

Which shape has the fewest sides?

- A. triangle
- B. pentagon
- C. rectangle
- D. hexagon

Answer: