











Standard One First Mid Term Test- Mathematics pt 1

Questions	Working
<p>1) What number comes after 21?</p> <p>Answer _____ 1 mk</p>	
<p>2)</p>  <p>a) How many circles are there? _____ 1 mark</p> <p>b) Word Name _____ 1mks</p>	
<p>3) 46 = _____tens and _____ones</p> <p style="text-align: right;">1 mks</p>	
<div style="display: flex; justify-content: space-around; align-items: center;">      </div> <p>1st _____ 3rd 4th 5th</p> <p>4) What is the fourth position? _____ 2mks</p>	
<p>5) Complete the number pattern below.</p> <p>33, 34 , _____ , 36 , _____ , 38, 29</p> <p style="text-align: right;">2mks</p>	
<p>6) a) What is the name of the green shape? _____</p> <p>b) What is the name of the red shape ? _____</p> <div style="border: 1px solid black; padding: 10px; display: flex; justify-content: space-around; align-items: center;">     </div> <p style="text-align: right;">2 mks</p>	