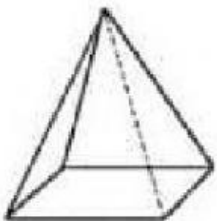

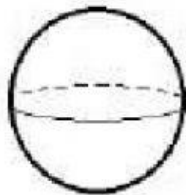
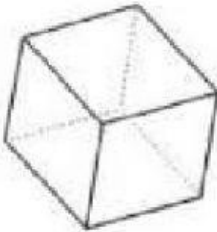
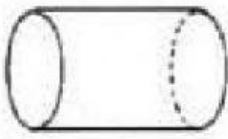


من أي مجسم تم بناء كل صورة

مدّوا خط

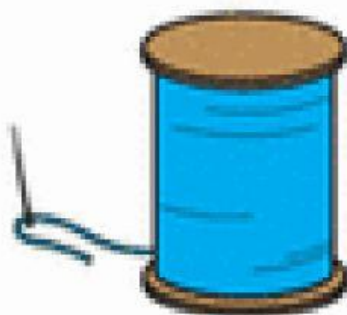
Relie les solides et les objets qui correspondent.



من أي مجسم تم بناء كل صورة

مدّوا خط

Cone



Cube



Cylinder



Sphere

