













Name: _____ Class: _____ Date: _____

		WORKING OUT
1)	<p>There are 15 .</p> <p>There are 2 .</p> <p>What is the sum? $15 + 2 =$ _____</p>	
2)	<p>There are 23 .</p> <p>3 more  come.</p> <p>How many in all? _____</p>	
3)	<p>I have 26 .</p> <p>I buy 4  more.</p> <p>How many do I have now? _____</p>	
4)	<p>Jack has 12 .</p> <p>Jill has 4 .</p> <p>How many in all? _____</p>	
5)	<p>There are 16 .</p> <p>2  more come.</p> <p>How many are there now? _____</p>	
6)	<p>I have 34 .</p> <p>I buy 5  more.</p> <p>How many do I have now? _____</p>	