

## Beginner Guitar/Mariachi Class Exam #1

Identify each musical element.

1.



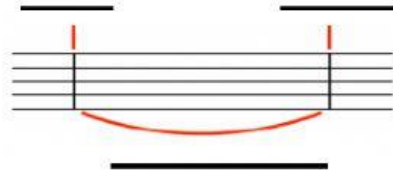
\_\_\_\_\_

2.



\_\_\_\_\_

3-4. Identify these parts of the staff



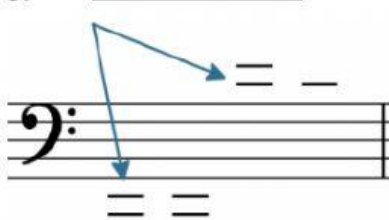
\_\_\_\_\_

5.



\_\_\_\_\_

6.



7.



\_\_\_\_\_

8-10. Identify the areas of the staff.



\_\_\_\_\_

\_\_\_\_\_

11.



\_\_\_\_\_

12.



\_\_\_\_\_

Name the kind of note or rest and its value in 4/4 time.

13 - 14.



\_\_\_\_\_

19 - 20.



\_\_\_\_\_

15 - 16.



\_\_\_\_\_

21 - 22.



\_\_\_\_\_

17 - 18.



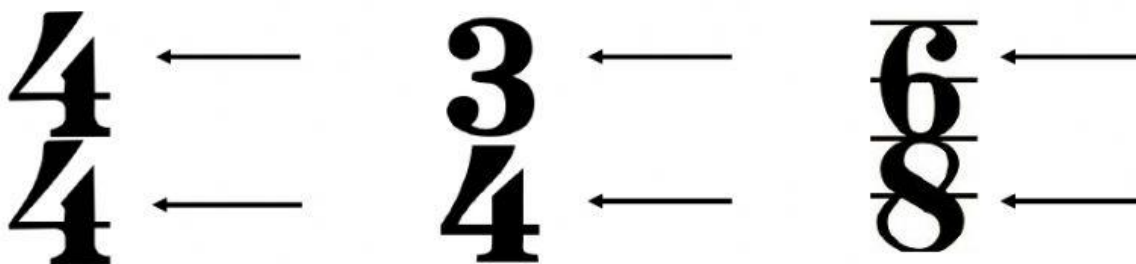
\_\_\_\_\_

23 - 24.




\_\_\_\_\_


25 - 27. What do the numbers in these time signature mean?



28 - 36. Number the lines and spaces of the staff.



46 - 61. Write the counting of this rhythm and place the parenthesis in the proper place,



## Names Of The Acoustic Guitar Parts

