





# Review 2

Use the song below to answer the following questions.



1. What Clef is used for this piece? \_\_\_\_\_
2. What is the longest note value in the song? \_\_\_\_\_
3. What is the shortest note value in the song? \_\_\_\_\_
4. Select the lowest note in the song. \_\_\_\_\_
5. How many times does this rhythm  appear? throughout the piece? \_\_\_\_\_
6. How many beats is this  worth? (found in measure 6) \_\_\_\_\_
7. How many times is the note D played? \_\_\_\_\_
8. How many measures are in the song? \_\_\_\_\_
9. Which rest value appears in the song? \_\_\_\_\_
10. How many times does this rest  appear? \_\_\_\_\_