




Review 2

Use the song below to answer the following questions.



1. What Clef is used for this piece? _____
2. What is the shortest note value in the song? _____
3. What is the longest note value in the song? _____
4. Select the highest note in the song. _____
5. How many times does this rhythm  appear throughout the piece? _____
6. How many measures are in the song? _____
7. Which measure only has the note C? _____
8. How many beats is this  worth? (found in measure 3) _____
9. What is the letter name of the highest note used in the piece? _____
10. How many times does the note "B" appear? _____