



Making 10!


Count how many more to make 10.
Write the number to make 10.




$$4 + \square = 10$$




$$7 + \square = 10$$



$$3 + \square = 10$$




$$6 + \square = 10$$




$$5 + \square = 10$$



$$9 + \square = 10$$



$$2 + \square = 10$$



$$8 + \square = 10$$