

# ATIVIDADE ONLINE

01/10/2020



## ATIVIDADE DE MATEMÁTICA

ASSISTA O VÍDEO ANTES DE FAZER A ATIVIDADE.

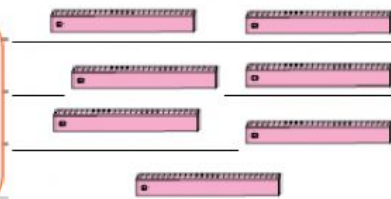



COMPLETE OS RETÂNGULOS ARRASTANDO AS QUANTIDADES CORRETAS DE CADA ELEMENTO.

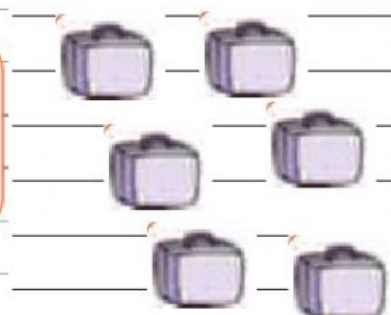
Uma dezena de lápis



Meia dezena de régua



Meia dezena de malas



Uma dezena de colas

