

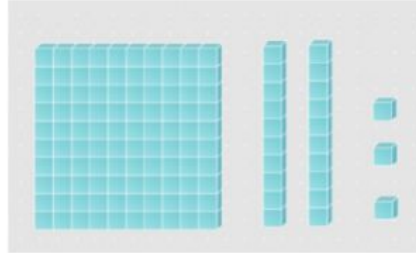


1. Which picture shows one hundred ones.




2. Fill in the missing number.

	2	3
--	---	---



3. Use the picture to cross out ( or ~~manipulatives~~) to solve this subtraction problem.



$$60 - 40 = \boxed{\phantom{00}}$$

4. Which picture represents this addition equation?

$$21 + 43 = 64$$

