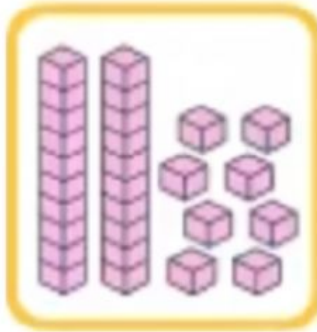


1. Look at the picture. Fill in the missing number.

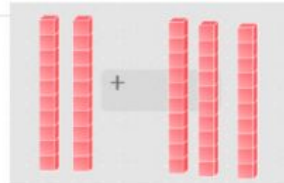


2	
---	--

2. Fill in the missing number.



	4
--	---

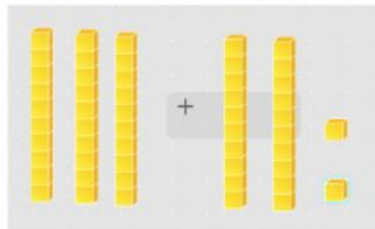


3. Add the tens. What is the sum?

20

50

4. Add the blocks. What is the sum?



52

35

Method Used: \_\_\_\_\_

Completed Task: Yes \_\_\_\_\_ No \_\_\_\_\_