




Name: _____

Date: _____


Multiplication as repeated addition

Write equal or not equal in the boxes below for each group of items below.


1.  

2. 

Fill in the blanks to complete each sentence. Use standard form (digits only) to complete the sentences. Write the repeated addition sentence or the multiplication sentence next to the pictures.

3. 

There are _____ equal groups with _____ in each group.

4. 

There are _____ groups of _____.

5. Drag and drop to create equal groups of items in the boxes below. Write the multiplication sentence on the line to match the drawing.





b) Explain your drawing on the line below.