

























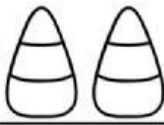
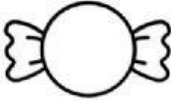


1. Draw the correct number of spots on each dog and ladybird. Solve the problems.

1	 +  = <input type="text"/>
2	 +  = <input type="text"/>
3	 +  = <input type="text"/>
4	 +  = <input type="text"/>

1	 +  = <input type="text"/>
2	 +  = <input type="text"/>
3	 +  = <input type="text"/>
4	 +  = <input type="text"/>

2. Solve the problems

3	+  = <input type="text"/>
2	+  = <input type="text"/>
5	+  = <input type="text"/>
4	+  = <input type="text"/>
1	+  = <input type="text"/>

7	+  = <input type="text"/>
6	+  = <input type="text"/>
9	+  = <input type="text"/>
5	+  = <input type="text"/>
8	+  = <input type="text"/>