

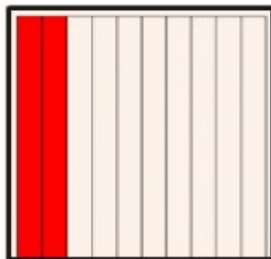
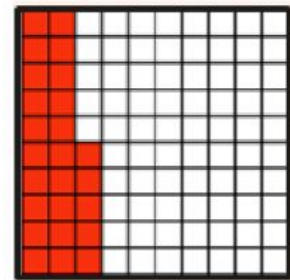

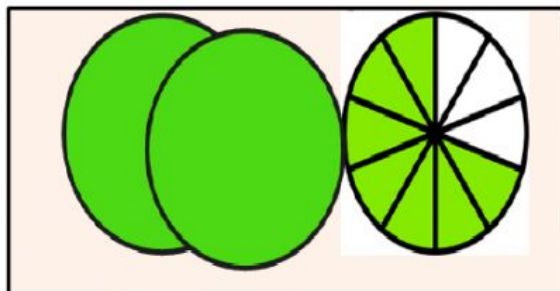


Name \_\_\_\_\_

grade \_\_\_\_\_

Question.1 Look at the picture , write the decimal number for it



Question 2 write each number in standard form :

a)Two whole and one tenth

b) three tenths

c) four thousandths

d) twenty-nine thousandths

e)thirty-nine thousandths

f) six hundred-two thousandths

g) ninety-six hundredths

