


## SOLVING WORD PROBLEMS – 2

I have **10** cans of soda and **8** cups to pour the soda into. How many more cups do I need?



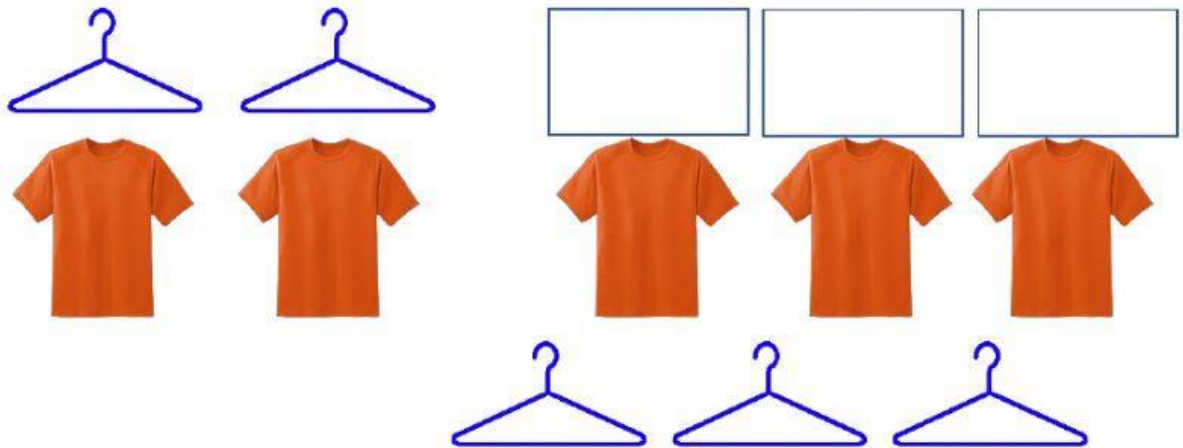
$$8 + \underline{\quad} = 10$$

I have **9** slices of pizza and **6** plates. How many more plates do I need for the rest of the pizza slices?



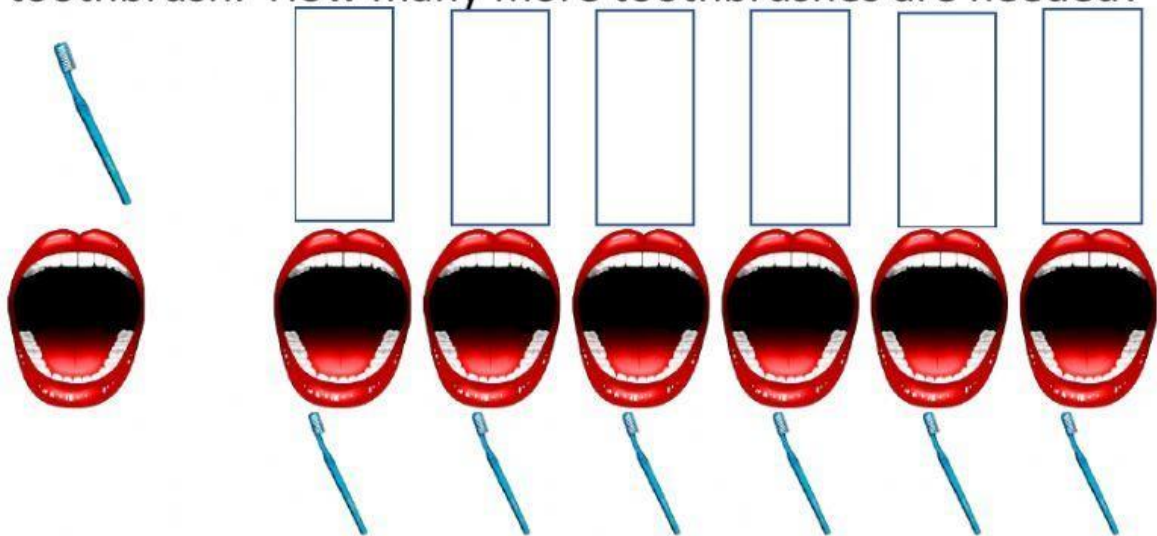
$$6 + \underline{\quad} = 9$$

I have **5** shirts to hang up and **2** hangers. How many more hangers do I need to hang up the remaining shirts?



$$2 + \underline{\quad} = 5$$

I have 7 sets of teeth that need to be brushed and 1 toothbrush. How many more toothbrushes are needed?



$$1 + \underline{\quad} = 7$$