


Model and Draw


What happens when **zero** is added to a number?

What happens when a number is added to zero?



$$\underline{5} + \underline{0} = \underline{5}$$

sum




$$\underline{0} + \underline{3} = \underline{3}$$

sum


Share and Show



Use the picture to write each part. Write the sum.




$$\underline{\quad} + \underline{\quad} = \underline{\quad}$$



$$\underline{\quad} + \underline{\quad} = \underline{\quad}$$



$$\underline{\quad} + \underline{\quad} = \underline{\quad}$$



$$\underline{\quad} + \underline{\quad} = \underline{\quad}$$

© Houghton Mifflin Harcourt Publishing Company