

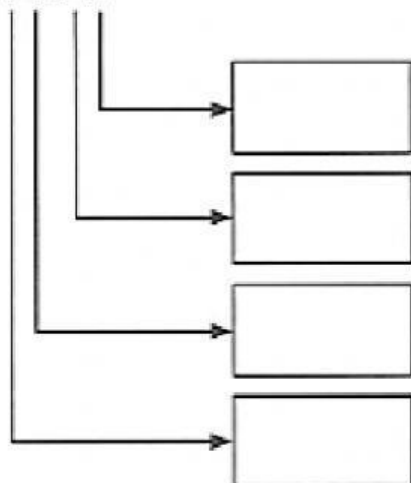
Mathematics

Decimals

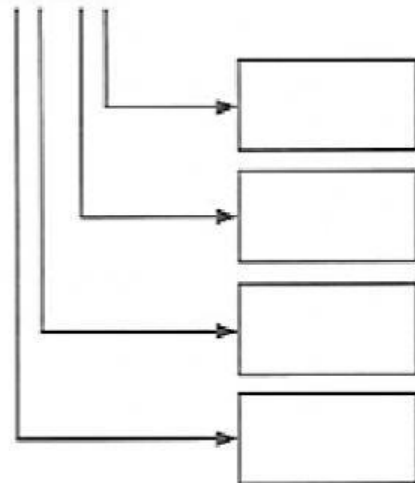
Monday

Write the values of the digits in each of the following numbers.

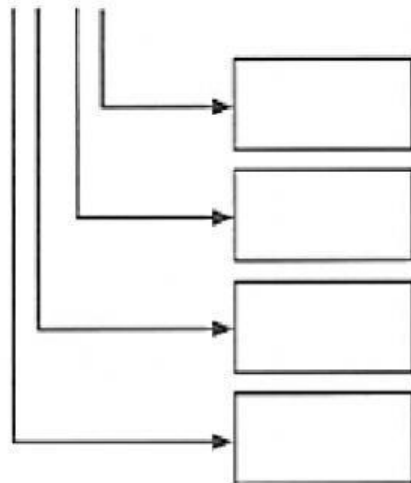
a) 90.23



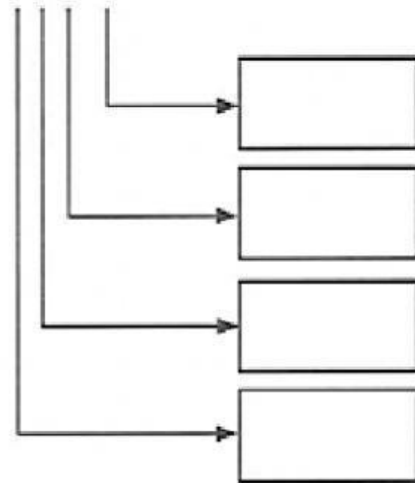
b) 87.41



c) 56.09



d) 218.8



Fill in the blanks.

- a) In 71.06, the digit _____ is in the tenths place.
Its value is _____.
- b) In 103.4, the digit _____ is in the tens place.
Its value is _____.
- c) In 19.4, the digit 4 is in the _____ place.
Its value is _____.
- d) In 57.01, the digit 5 is in the _____ place.
Its value is _____.
- e) In 28.63, the digit 3 is in the _____ place.
Its value is _____.

