






# CLASS 4 TERM 2 SHAPES

Fill in the blanks with the correct answers

1. I have no side, no vertices and many lines of symmetry. Who am I? ~~~~~ 
2. I have 4 equal sides and 4 lines of symmetry. Who am I? ~~~~~ 
3. I have 3 equal sides, 3 vertices and 3 lines of symmetry, who am I? ~~~~~ 
4. I have 4 sides opposite sides are equal and I have 2 lines of symmetry. Who am I? ~~~~~ 
5. The line which divides a figure into two equal halves is ~~~~~ 

more worksheets are available [www.icteducationtools.com](http://www.icteducationtools.com)