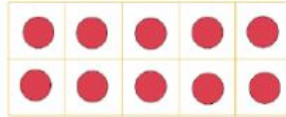


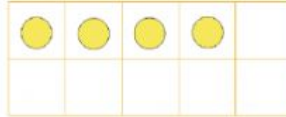
Write each number in two different ways.

Follow the example.



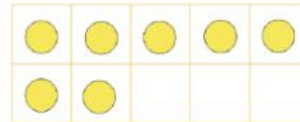
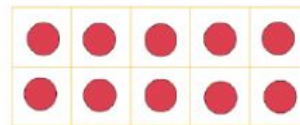
14 is 10 and 4

14 is 1 ten and 4 ones.



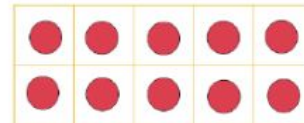
17 is _____ and _____

17 is _____ tens and _____ ones.



19 is _____ and _____

19 is _____ tens and _____ ones.



16 is _____ and _____

16 is _____ tens and _____ ones.

