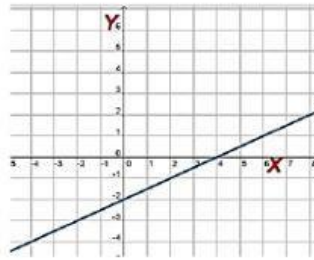


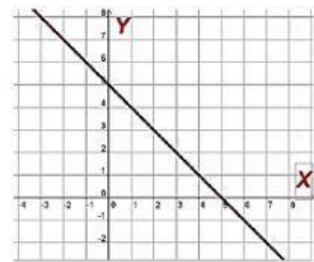
RELACIONANDO COLUMNAS

Actividad: Identificando Pendientes – Con solo mirar

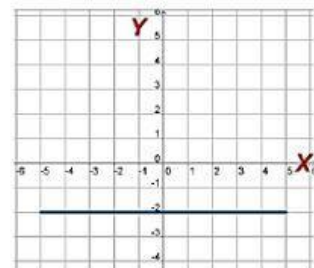
Relaciona las gráficas lado izquierda con la pendiente de la columna lado derecha correctamente



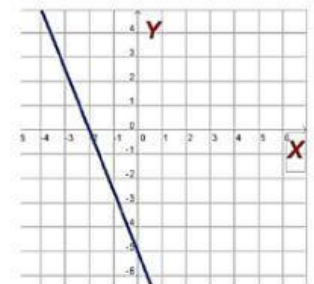
$$m = 0$$



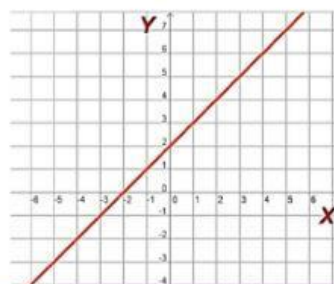
$$m = 1$$



$$m = \frac{1}{5}$$



$$m = -1$$



$$m = -2$$