

PAKISTAN INTERNATIONAL SCHOOL JEDDAH – (English Section)
First Term 2020 – 2021

Subject	Unit	Lessons	Type of Sheet
Mathematics	2	5 and 6	Homework Sheet
Name:		Y2 -	Date:

Q1. Write the numbers in each set in order, smallest to largest.

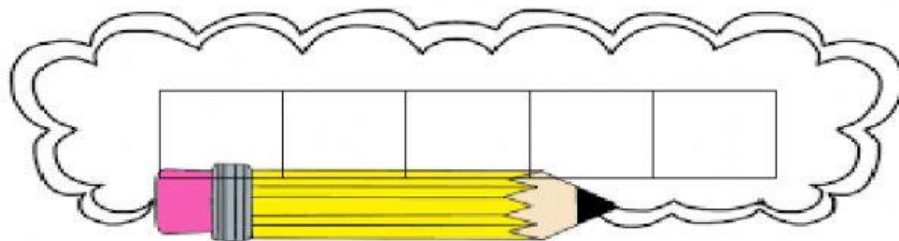
a. 16, 6, 25, 20

b. 95, 86, 52, 21

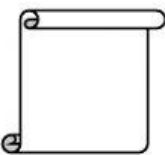
c. 31, 44, 36, 63

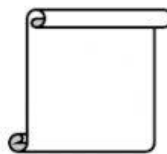
Q2. Write the numbers in each set in order, largest to smallest.

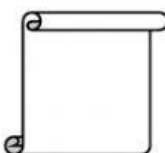
a. 28, 58, 61, 27, 82

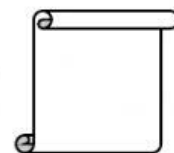


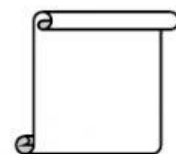
Q3. Round the following numbers to the nearest 10.

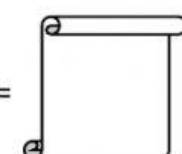
31 = 

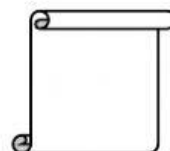
56 = 

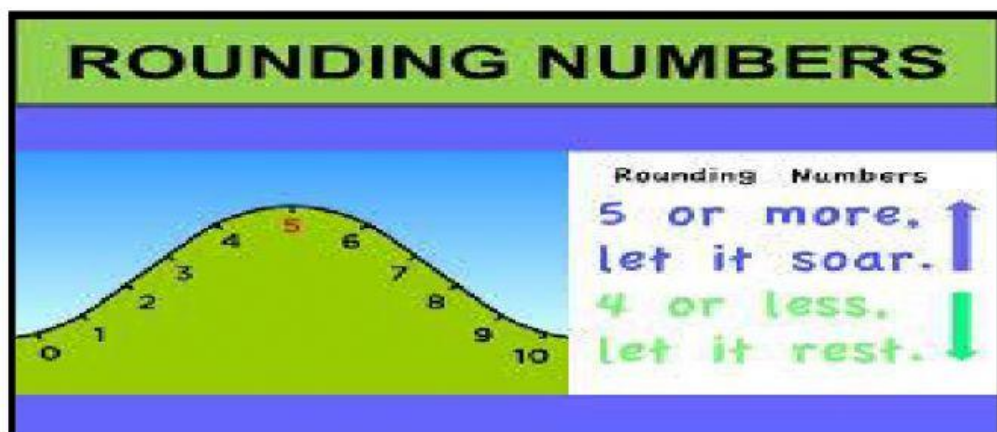
64 = 

73 = 

87 = 

18 = 

45 = 



Q4. Choose, which 10 each number rounds to.

	<div>49</div>	<div>51</div>
<div>40</div>	<div>54</div>	<div>50</div>
	<div>42</div>	<div>44</div>

