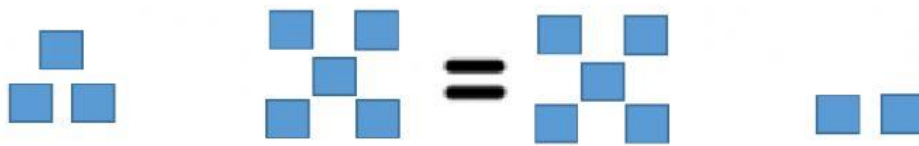


Balancing Equations

Name: _____

Directions: Circle Equal or Not Equal for each set of equations.

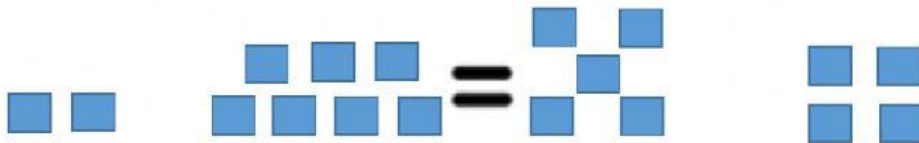


$$3 + 5 = 5 + 2$$



Equal =

Not Equal \neq

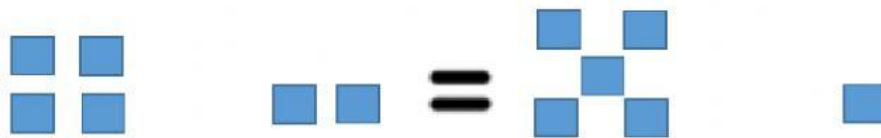


$$2 + 7 = 5 + 4$$



Equal =

Not Equal \neq

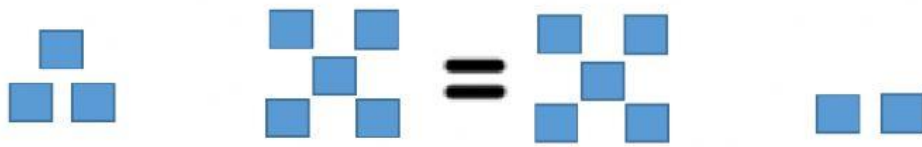


$$4 + 2 = 5 + 1$$



Equal =

Not Equal \neq

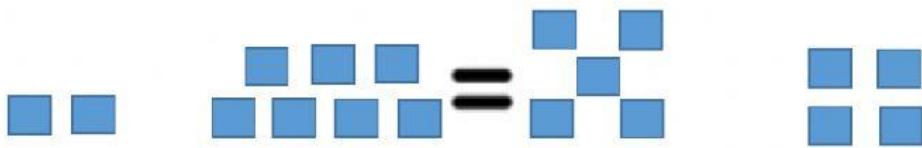


$$3 + 5 = 5 + 2$$



Equal =

Not Equal \neq

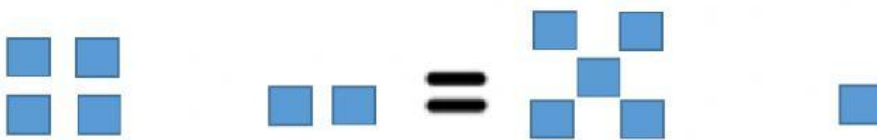


$$2 + 7 = 5 + 4$$



Equal =

Not Equal \neq



$$4 + 2 = 5 + 1$$



Equal =

Not Equal \neq